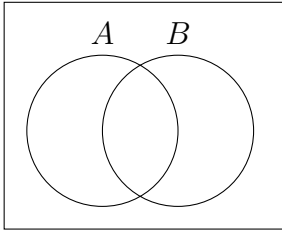
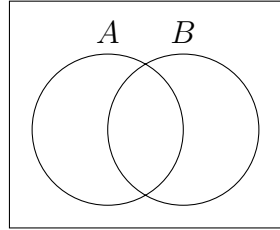


Let shade in the following sets in the Venn Diagram:

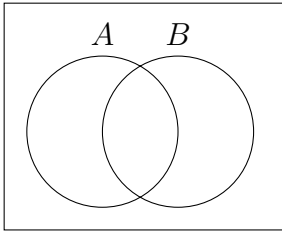
1.  $A \cup B$



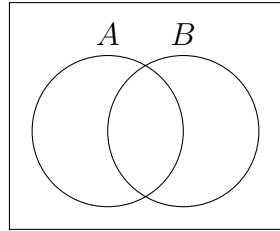
4.  $B^c$



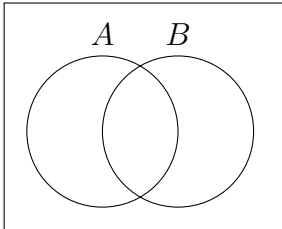
2.  $A \cap B$



5.  $A^c \cap B^c$



3.  $A^c$



6.  $(A \cup B)^c$

